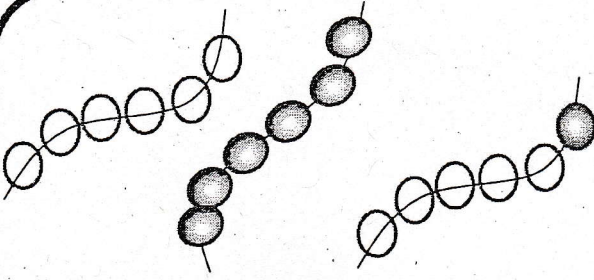



Ecris l'opération sous forme d'addition.


1



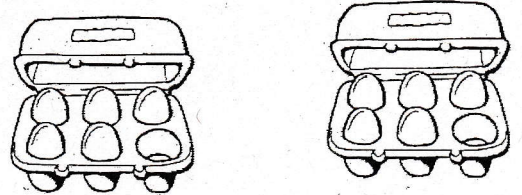
$$6 + 6 + 6 = 18$$




$$2 + 2 + 2 + 2 + 2 + 2 = 12$$



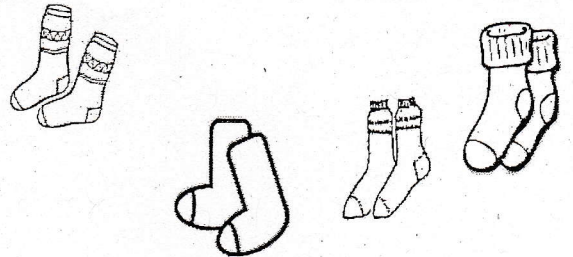
$$3 + 3 + 3 = 9$$




$$6 + 6 = 12$$



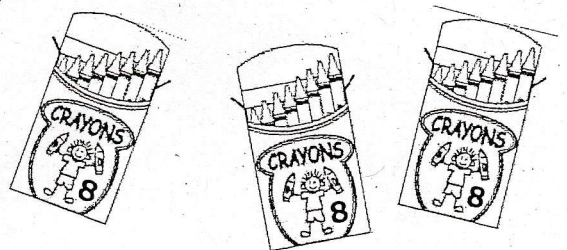
$$5 + 5 + 5 + 5 = 20$$



$$2 + 2 + 2 + 2 = 8$$



$$3 + 3 + 3 + 3 + 3 = 15$$



$$8 + 8 + 8 = 24$$